

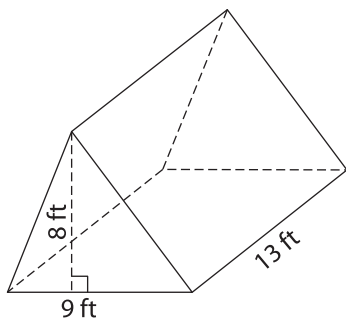
Name : \_\_\_\_\_

## Volume - Mixed Shapes

Integers: L1S3

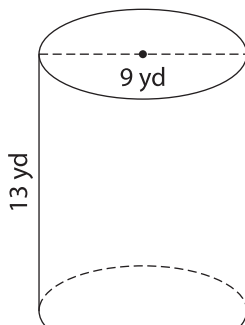
Find the volume of each shape. Round your answer to two decimal places. (use  $\pi = 3.14$ )

1)

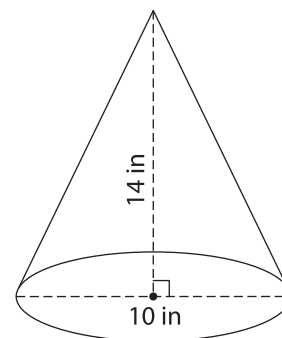


Volume = \_\_\_\_\_

2)

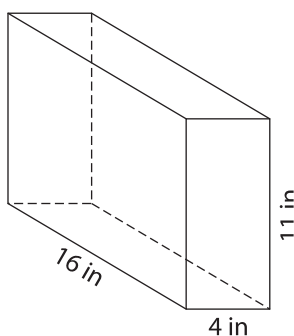


3)



Volume = \_\_\_\_\_

4)



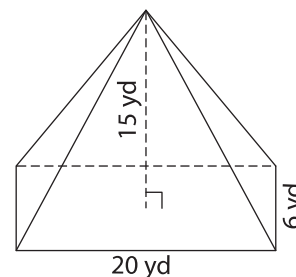
Volume = \_\_\_\_\_

**PREVIEW**  
Gain complete access to the largest collection of worksheets in all subjects!

Members, please log in to download this worksheet.

Not a member? Please sign up to gain complete access.

[www.mathworksheets4kids.com](http://www.mathworksheets4kids.com)



Volume = \_\_\_\_\_

7) The radius of a sphere is 4 places. (use  $\pi = 3.14$ )

Round your answer to two decimal

8) The base of a pyramid is a triangle with a base of 10 feet and a height of 17 feet. If the height of the pyramid is 15 feet, determine its volume.