

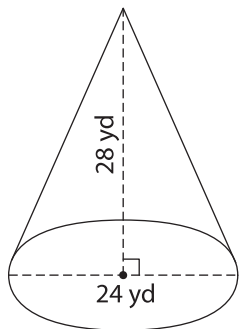
Name : _____

Integers: L2S1

Volume - Mixed Shapes

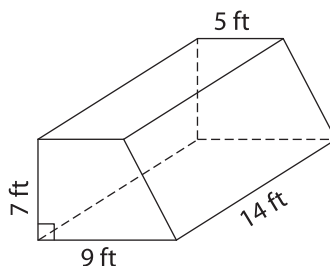
Find the volume of each shape. Round your answer to two decimal places. (use $\pi = 3.14$)

1)

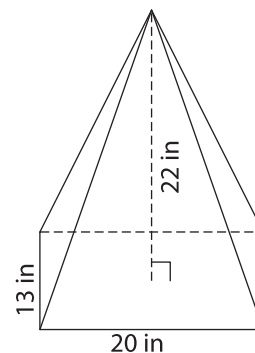


Volume = _____

2)

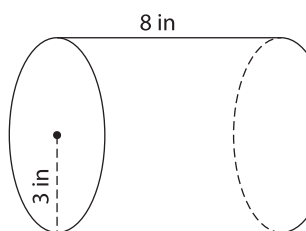


3)



Volume = _____

4)



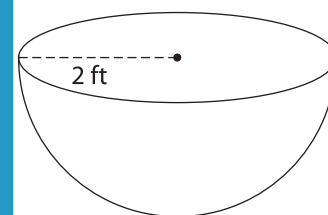
Volume = _____

Gain complete access to the largest collection of worksheets in all subjects!

Members, please log in to download this worksheet.

Not a member? Please sign up to gain complete access.

www.mathworksheets4kids.com



Volume = _____

7) The height of a cone is 15

its volume. (use $\pi = 3.14$)

8) The height of a square prism is 19 feet. If the sidelength of the base square is 23 feet, find the volume of the prism.
