

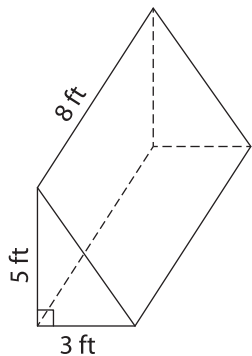
Name : _____

Volume - Mixed Shapes

Integers: L2S2

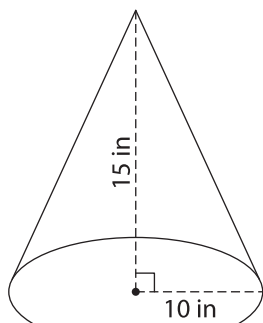
Find the volume of each shape. Round your answer to two decimal places. (use $\pi = 3.14$)

1)

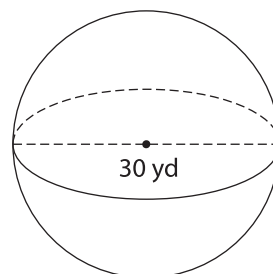


Volume = _____

2)

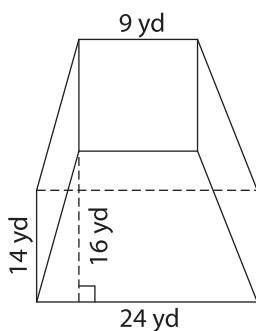


3)



Volume = _____

4)



Volume = _____

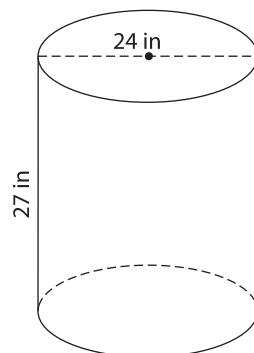
PREVIEW

Gain complete access to the largest collection of worksheets in all subjects!

Members, please log in to download this worksheet.

Not a member? Please sign up to gain complete access.

www.mathworksheets4kids.com



Volume = _____

7) A rectangular pyramid has a height of 14 feet. Find the volume of the pyramid. Round your answer to two decimal places.

of 14 feet. Find the volume

8) The base of a prism is a parallelogram whose base and height are 11 inches and 12 inches respectively. If the length of the prism is 29 inches, what is its volume?
