

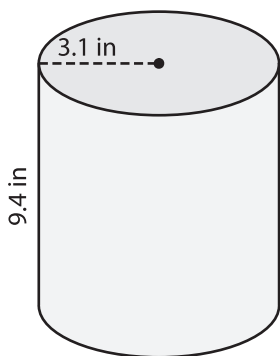
Name : \_\_\_\_\_

# Volume - Prisms and Cylinders

Decimals: L1S2

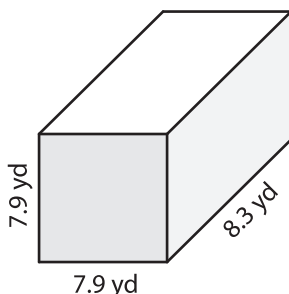
Find the volume of each shape. Round your answer to two decimal places. (use  $\pi = 3.14$ )

1)

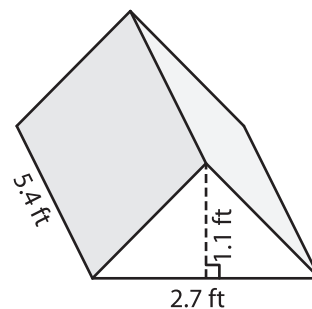


Volume = \_\_\_\_\_

2)

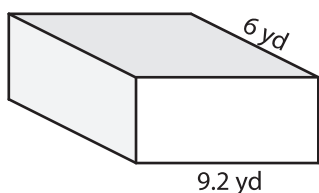


3)



Volume = \_\_\_\_\_

4)



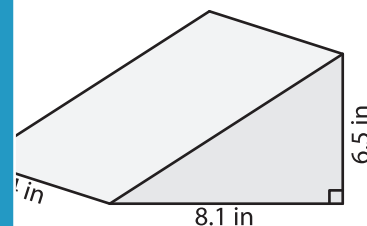
Volume = \_\_\_\_\_

**PREVIEW**  
Gain complete access to the largest collection of worksheets in all subjects!

Members, please log in to download this worksheet.

Not a member? Please sign up to gain complete access.

[www.mathworksheets4kids.com](http://www.mathworksheets4kids.com)



Volume = \_\_\_\_\_

7) The height of a square prism is 2.3 yards, determine the volume of the prism. Round your answer to two decimal places.

\_\_\_\_\_

8) The length, width and height of a rectangular prism are 8 feet, 6.5 feet and 3.5 feet respectively. Find its volume.

\_\_\_\_\_