

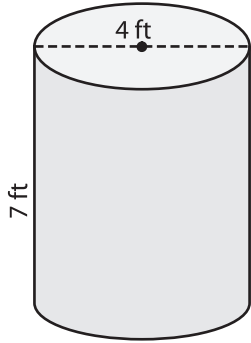
Name : \_\_\_\_\_

# Volume - Prisms and Cylinders

Integers: L1S2

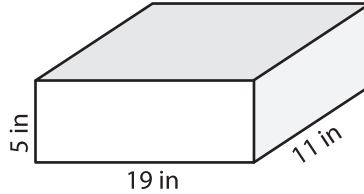
Find the volume of each shape. (use  $\pi = 3.14$ )

1)

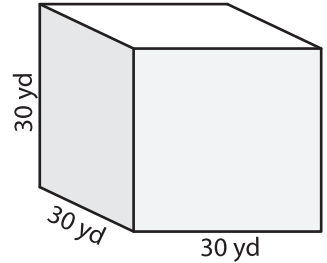


Volume = \_\_\_\_\_

2)

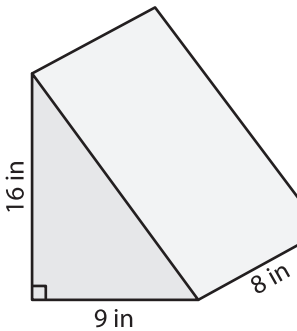


3)



Volume = \_\_\_\_\_

4)



Volume = \_\_\_\_\_

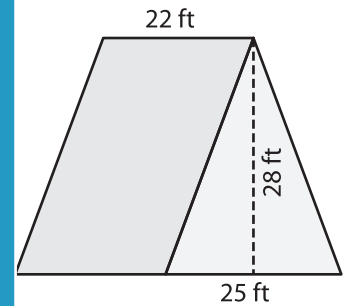
**PREVIEW**

Gain complete access to the largest collection of worksheets in all subjects!

Members, please log in to download this worksheet.

Not a member? Please sign up to gain complete access.

[www.mathworksheets4kids.com](http://www.mathworksheets4kids.com)



Volume = \_\_\_\_\_

7) A rectangular prism has a volume of 1,200 cubic inches and a height of 27 inches. What is the length of the prism?

Volume = \_\_\_\_\_

8) The diameter of a cylinder is 26 yards. Find the volume of the cylinder, if its height is 29 yards. (use  $\pi = 3.14$ )