

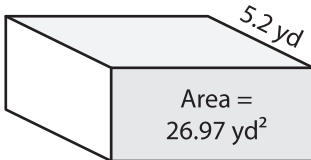
Name : _____

Volume - Rectangular Prism

Decimals: S1

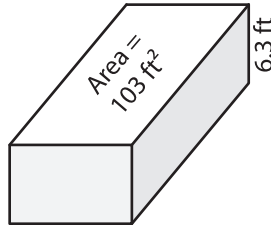
Find the volume of each rectangular prism. Round your answer to two decimal places.

1)

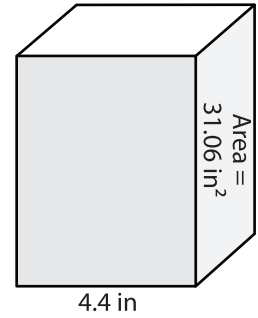


Volume = _____

2)

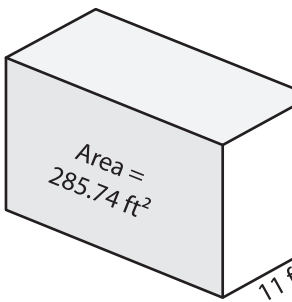


3)



Volume = _____

4)



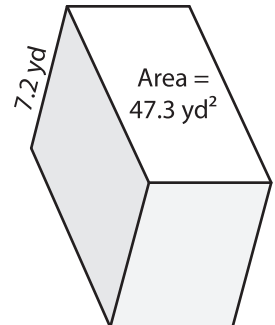
Volume = _____

PREVIEW
Gain complete access to the largest collection of worksheets in all subjects!

Members, please log in to download this worksheet.

Not a member? Please sign up to gain complete access.

www.mathworksheets4kids.com



Volume = _____

7) The base area of a rectangular prism is 103 ft^2 .

Find the volume of the rectangular prism if its length is 17 inches.

8) Determine the volume of the rectangular prism with a base area of $30.38 \text{ square yards}$ and a height of 3.8 yards . Round your answer to two decimal places.
