

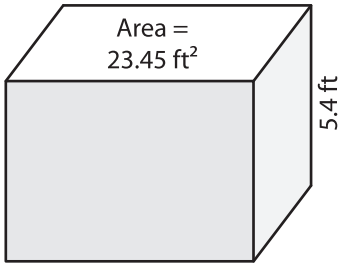
Name : \_\_\_\_\_

## Volume - Rectangular Prism

Decimals: S3

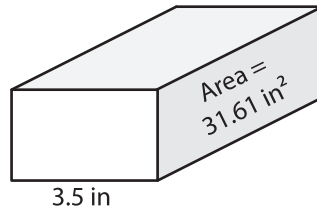
Find the volume of each rectangular prism. Round your answer to two decimal places.

1)

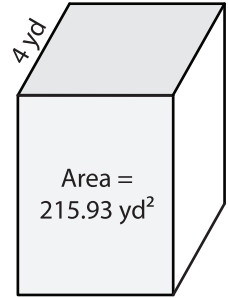


Volume = \_\_\_\_\_

2)

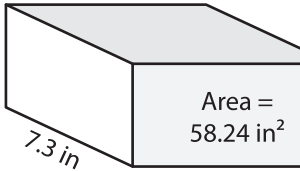


3)



Volume = \_\_\_\_\_

4)



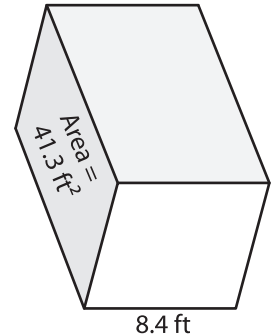
Volume = \_\_\_\_\_

**PREVIEW**  
Gain complete access to the largest collection of worksheets in all subjects!

Members, please log in to download this worksheet.

Not a member? Please sign up to gain complete access.

[www.mathworksheets4kids.com](http://www.mathworksheets4kids.com)



Volume = \_\_\_\_\_

7) The height of a rectangular prism is 12.5

yards, what is its volume?

\_\_\_\_\_

8) The base area of a rectangular prism is 109 square feet. Determine the volume if its length is 11.3 feet.

\_\_\_\_\_