

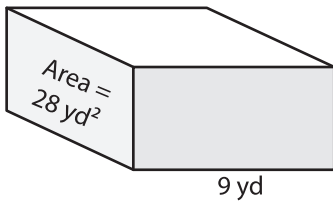
Name : _____

Volume - Rectangular Prism

Integers: 52

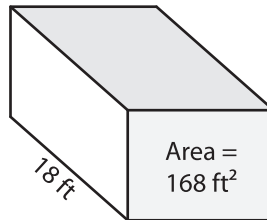
Find the volume of each rectangular prism.

1)

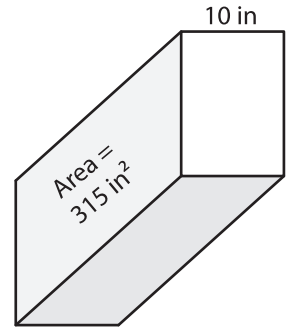


Volume = _____

2)

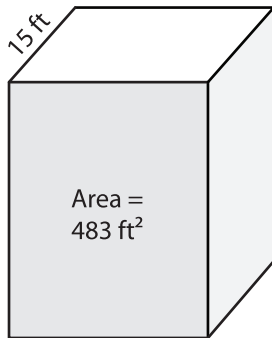


3)



Volume = _____

4)



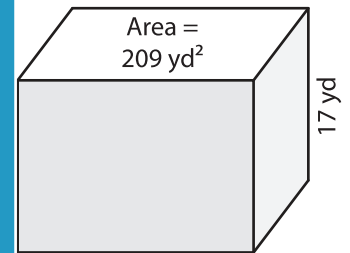
Volume = _____

PREVIEW
Gain complete access to the largest collection of worksheets in all subjects!

Members, please log in to download this worksheet.

Not a member? Please sign up to gain complete access.

www.mathworksheets4kids.com



Volume = _____

7) The base area of a rectangular prism is 120 square feet. What is its volume if its length is 24 inches.

8) The height of a rectangular prism is 13 yards. If the base area is 255 square yards, what is its volume?
