

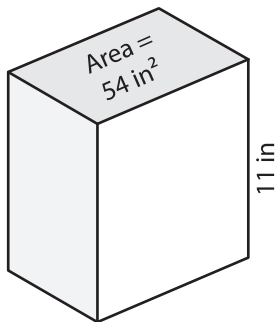
Name : \_\_\_\_\_

## Volume - Rectangular Prism

Integers: 53

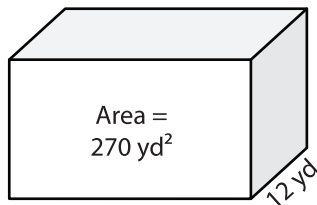
Find the volume of each rectangular prism.

1)

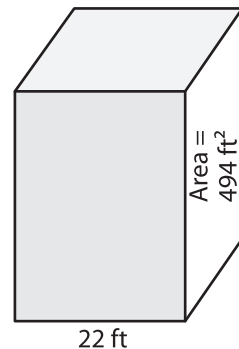


Volume = \_\_\_\_\_

2)

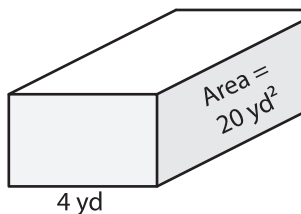


3)



Volume = \_\_\_\_\_

4)



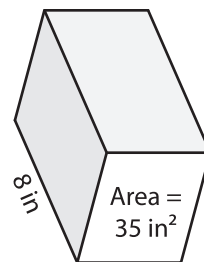
Volume = \_\_\_\_\_

**PREVIEW**  
Gain complete access to the largest collection of worksheets in all subjects!

Members, please log in to download this worksheet.

Not a member? Please sign up to gain complete access.

[www.mathworksheets4kids.com](http://www.mathworksheets4kids.com)



Volume = \_\_\_\_\_

7) Determine the volume of

feet and a height of 14 feet.

8) The base area of a rectangular prism is 460 square inches. Find the volume if its length is 25 inches.