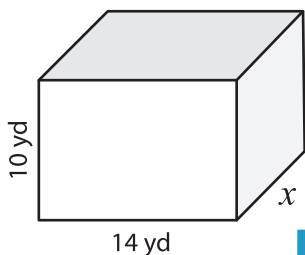


Volume - Rectangular Prism

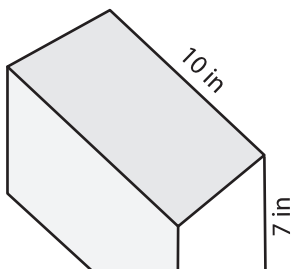
A) Find the value of x .

1) Volume = $1,260 \text{ yd}^3$

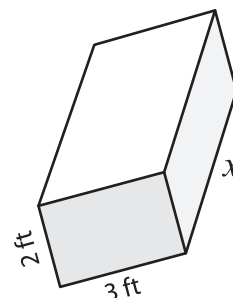


$x =$ _____

2) Volume = 350 in^3

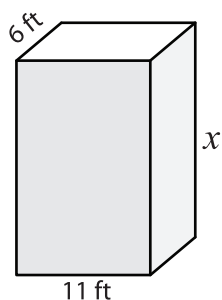


3) Volume = 24 ft^3



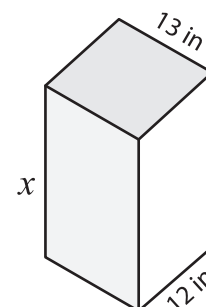
$x =$ _____

4) Volume = $1,188 \text{ ft}^3$



$x =$ _____

Volume = $3,120 \text{ in}^3$



$x =$ _____

7) The width and height length of the rectangular prism are x and x respectively. Find the volume of the rectangular prism.

The length, width and height of the rectangular prism are 10 units, 10 units and 10 units respectively. Find the volume of the rectangular prism.

PREVIEW

Gain complete access to the largest collection of worksheets in all subjects!

Members, please log in to download this worksheet.

Not a member? Please sign up to gain complete access.

www.mathworksheets4kids.com

8) A rectangular prism has a length of 16 inches and a height of 7 inches. If the volume of the rectangular prism is 1,120 cubic inches, find its width.