

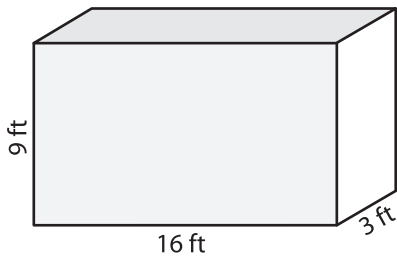
Name : _____

Volume - Rectangular Prism

ES1

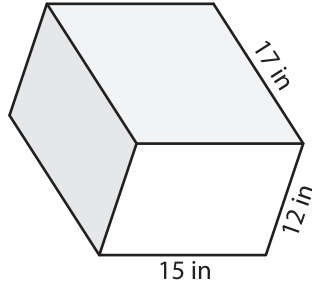
A) Find the volume of each rectangular prism.

1)



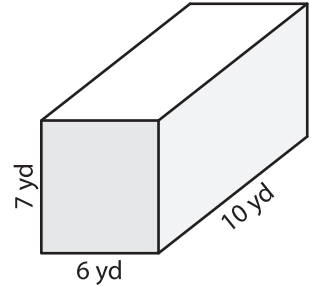
Volume = _____

2)



Volume = _____

3)



Volume = _____

B) Find the volume of each rectangular prism from the given parameters.

4) length = 19 in ; width = 17 in ; height = 13 in

Volume = _____

5) height = 14 ft ; length = 11 ft ; width = 8 ft

Volume = _____

6) width = 3 yd ; height = 16 yd ; length = 18 yd

Volume = _____

7) length = 20 in ; height = 9 in ; width = 7 in

Volume = _____

8) A rectangular prism has a length of 12 feet, a width of 4 feet and a height of 8 feet. What is the volume of the prism?
