

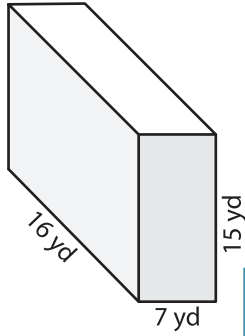
Name : _____

Volume - Rectangular Prism

ES2

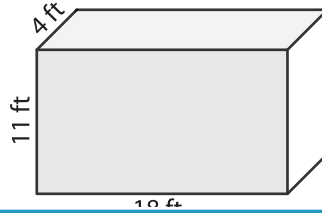
A) Find the volume of each rectangular prism.

1)



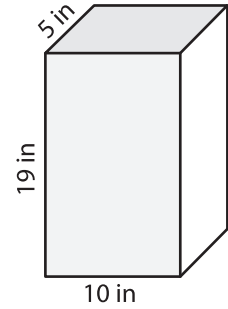
Volume = _____

2)



Volume = _____

3)



Volume = _____

B) Find the volume of each rectangular prism.

4) width = 4 ft ; height = 10 ft ; length = 12 ft

Volume = _____

6) length = 12 in ; width = 8 in ; height = 5 in

Volume = _____

Gain complete access to the largest collection of worksheets in all subjects!

Members, please log in to download this worksheet.

Not a member? Please sign up to gain complete access.

www.mathworksheets4kids.com

Volume = _____

8) Find the volume of a rectangular prism whose length, width and height are 20 yards, 17 yards and 13 yards respectively.
