

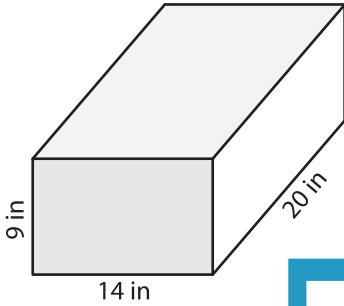
Name : _____

Volume - Rectangular Prism

ES3

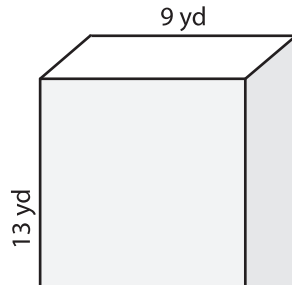
A) Find the volume of each rectangular prism.

1)



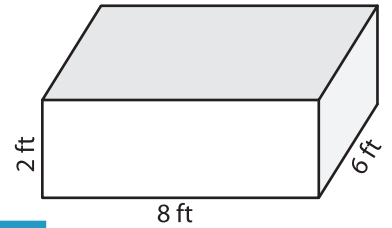
Volume = _____

2)



Volume = _____

3)



Volume = _____

B) Find the volume of each rectangular prism.

4) height = 4 yd ; length = _____

Volume = _____

6) height = 16 ft ; width = _____

Volume = _____

Gain complete access to the largest collection of worksheets in all subjects!

Members, please log in to download this worksheet.

Not a member? Please sign up to gain complete access.

www.mathworksheets4kids.com

Volume = _____

8) The length, width and height of a rectangular prism are 18 inches, 10 inches and 15 inches respectively. What is its volume?
