

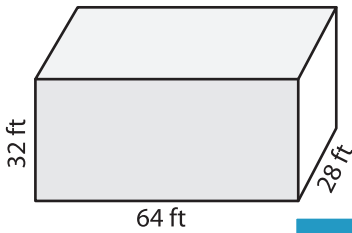
Name : _____

Volume - Rectangular Prism

MS1

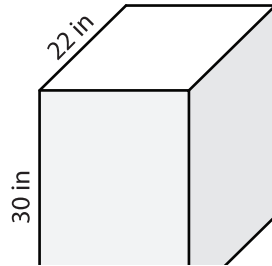
A) Find the volume of each rectangular prism.

1)



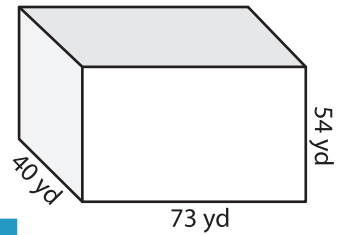
Volume = _____

2)



Volume = _____

3)



Volume = _____

B) Find the volume of each rectangular prism.

4) width = 20 in ; length = _____

Volume = _____

6) height = 53 yd ; width = _____

Volume = _____

Gain complete access to the largest collection of worksheets in all subjects!

Members, please log in to download this worksheet.

Not a member? Please sign up to gain complete access.

www.mathworksheets4kids.com

height = _____

length = 24 ft ; width = 37 ft

height = 17 in ; length = 15 in

Volume = _____

8) A rectangular prism has a length of 96 feet, a width of 79 feet and a height of 67 feet. What is the volume of the prism?
