

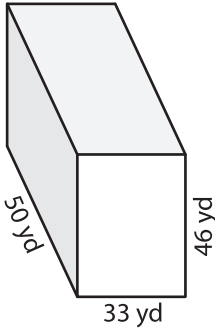
Name : _____

Volume - Rectangular Prism

MS2


A) Find the volume of each rectangular prism.

1)



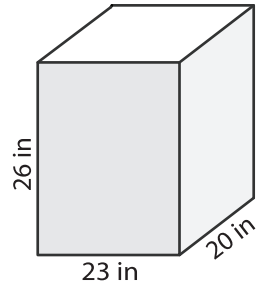
Volume = _____

2)



Volume = _____

3)



Volume = _____

B) Find the volume of each rectangular prism.

4) length = 54 ft ; width = 12 ft ; height = 8 ft

Volume = _____

6) width = 9 in ; length = 20 in ; height = 12 in

Volume = _____

Gain complete access to the largest collection of worksheets in all subjects!

Members, please log in to download this worksheet.

Not a member? Please sign up to gain complete access.

www.mathworksheets4kids.com

eters.

th = 27 yd ; length = 55 yd

nt = 66 ft ; width = 34 ft

Volume = _____

8) The length, width and height of a rectangular prism are 82 yards, 55 yards and 68 yards respectively. What is its volume?
