

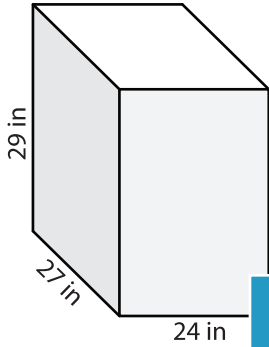
Name : \_\_\_\_\_

## Volume - Rectangular Prism

MS3

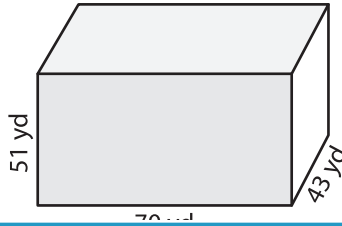
A) Find the volume of each rectangular prism.

1)



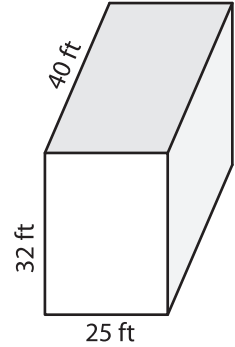
Volume = \_\_\_\_\_

2)



Volume = \_\_\_\_\_

3)



Volume = \_\_\_\_\_

B) Find the volume of each rectangular prism.

4) height = 10 yd ; width = \_\_\_\_\_

Volume = \_\_\_\_\_

6) length = 82 ft ; width = \_\_\_\_\_

Volume = \_\_\_\_\_

Gain complete access to the largest collection of worksheets in all subjects!

Members, please log in to download this worksheet.

Not a member? Please sign up to gain complete access.

[www.mathworksheets4kids.com](http://www.mathworksheets4kids.com)

eters.

h = 26 in ; height = 30 in

length = 59 yd ; width = 44 yd

Volume = \_\_\_\_\_

8) Determine the volume of a rectangular prism whose length, width and height are 36 inches, 8 inches and 48 inches respectively.

\_\_\_\_\_