

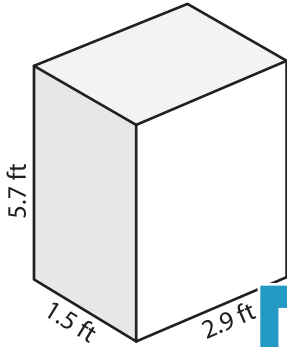
Name : _____

Volume - Rectangular Prism

Decimals: S3

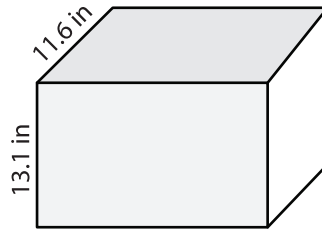
A) Find the volume of each rectangular prism. Round your answer to two decimal places.

1)



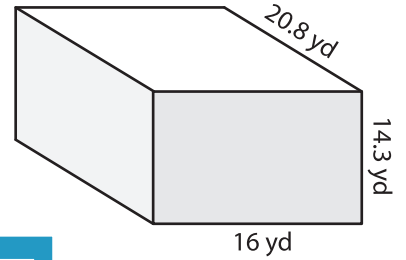
Volume = _____

2)



Volume = _____

3)



Volume = _____

B) Find the volume of each rectangular prism. Round your answer to two decimal places.

4) width = 15.6 in ; length = 10.2 in ; height = 8.6 ft

Volume = _____

6) height = 4.4 yd ; width = 12.5 yd ; length = 18.7 yd

Volume = _____

PREVIEW

Gain complete access to the largest collection of worksheets in all subjects!

Members, please log in to download this worksheet.

Not a member? Please sign up to gain complete access.

www.mathworksheets4kids.com

Volume = _____

8) Find the volume of a rectangular prism whose length, width and height are 18 feet, 10.8 feet and 14.5 feet respectively.
