

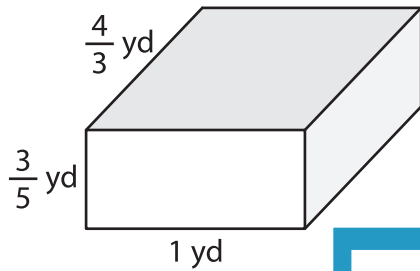
Name : _____

Volume - Rectangular Prism

Fractions: S2

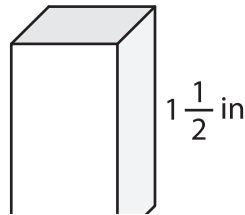
A) Find the volume of each rectangular prism.

1)



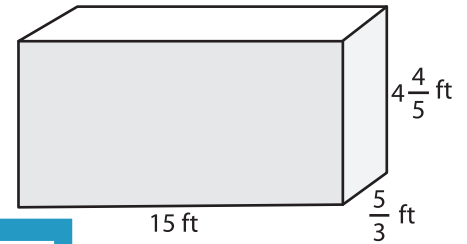
Volume = _____

2)



Volume = _____

3)



Volume = _____

B) Find the volume of each

4) height = $\frac{1}{2}$ ft ; length = _____

Volume = _____

6) length = $\frac{4}{7}$ yd ; width = _____

Volume = _____

Gain complete access to the largest collection of worksheets in all subjects!

Members, please log in to download this worksheet.

Not a member? Please sign up to gain complete access.

www.mathworksheets4kids.com

height = $1\frac{1}{5}$ in ; length = $\frac{3}{8}$ in

height = 3 ft ; width = $\frac{8}{9}$ ft

Volume = _____

8) A rectangular prism has a length of $2\frac{2}{3}$ yards, a width of $\frac{1}{4}$ yard, and a height of 2 yards. Determine the volume of the prism.
