

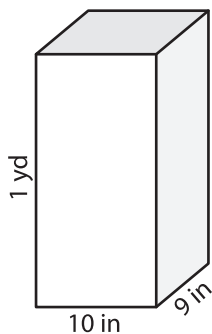
Name : _____

Volume - Rectangular Prism

Sheet 1

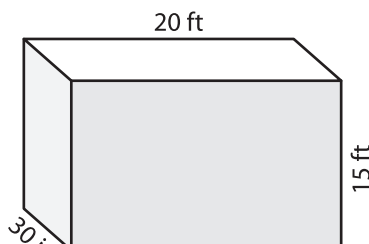
A) Find the volume of each rectangular prism.

1)

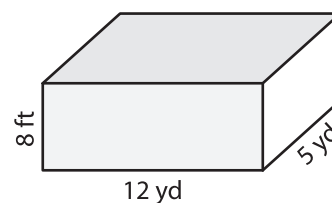


Volume = _____

2)



3)



Volume = _____ yd³

B) Find the volume of each rectangular prism.

4) height = 6 yd ; length = 10 yd ; width = 4 yd

Volume = _____

6) width = 3 in ; height = 4 in ; length = 10 in

Volume = _____ in³

Volume = _____ yd³

8) The length, width and height of a rectangular prism are 16 feet, 7 feet and 27 inches respectively. What is its volume in cubic feet?

PREVIEW
Gain complete access to the largest collection of worksheets in all subjects!

Members, please log in to download this worksheet.

Not a member? Please sign up to gain complete access.

www.mathworksheets4kids.com