

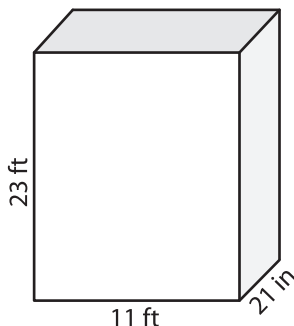
Name : \_\_\_\_\_

## Volume - Rectangular Prism

Sheet 2

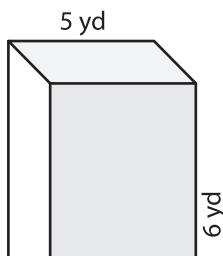
A) Find the volume of each rectangular prism.

1)



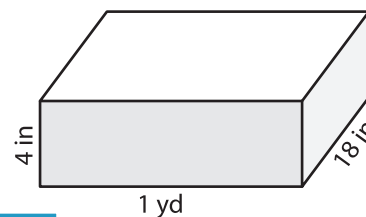
Volume = \_\_\_\_\_

2)



Volume = \_\_\_\_\_

3)



Volume = \_\_\_\_\_ in<sup>3</sup>

B) Find the volume of each rectangular prism.

4) length = 2 ft ; width = 12 ft ; height = 8 ft

Volume = \_\_\_\_\_

6) height = 10 yd ; length = 15 yd ; width = 8 yd

Volume = \_\_\_\_\_ yd<sup>3</sup>

Gain complete access to the largest collection of worksheets in all subjects!

Members, please log in to download this worksheet.

Not a member? Please sign up to gain complete access.

[www.mathworksheets4kids.com](http://www.mathworksheets4kids.com)

Volume = \_\_\_\_\_ ft<sup>3</sup>

8) A rectangular prism has a length of 3 yards, a width of 19 inches and a height of 15 inches. What is the volume of the prism in cubic inches?

\_\_\_\_\_