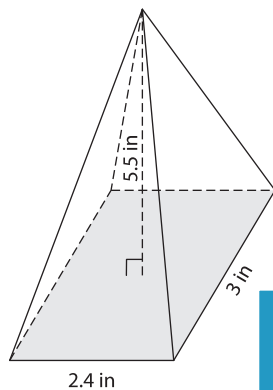


Name : \_\_\_\_\_

## Volume - Rectangular Pyramid

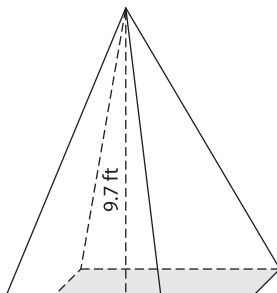
A) Find the volume of each rectangular pyramid. Round your answer to two decimal places.

1)

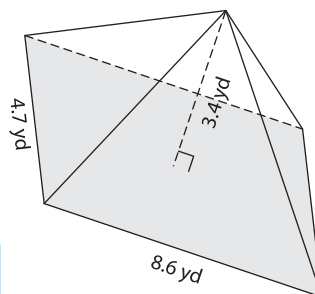


Volume = \_\_\_\_\_

2)



3)



Volume = \_\_\_\_\_

B) Find the volume of each rectangular pyramid. Round your answer to two decimal places.

4) length = 4.5 ft ; width = 3.2 ft ; height = 2.1 ft

Volume = \_\_\_\_\_

5) length = 5.7 ft ; width = 1.8 in ; height = 1.2 in

Volume = \_\_\_\_\_

6) length = 6.3 yd ; width = 8.6 yd ; height = 3.4 yd

Volume = \_\_\_\_\_

7) A rectangular pyramid has a length of 9.9 inches, a width of 8 inches and a height of 4.9 inches. Find the volume of the pyramid.

\_\_\_\_\_

**PREVIEW**

Gain complete access to the largest collection of worksheets in all subjects!

Members, please log in to download this worksheet.

Not a member? Please sign up to gain complete access.

[www.mathworksheets4kids.com](http://www.mathworksheets4kids.com)