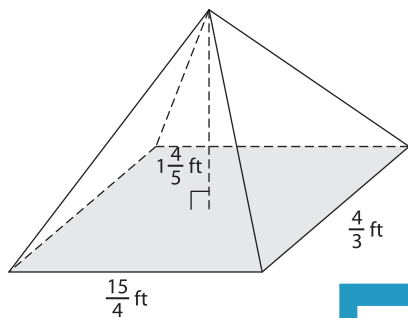


Name : \_\_\_\_\_

## Volume - Rectangular Pyramid

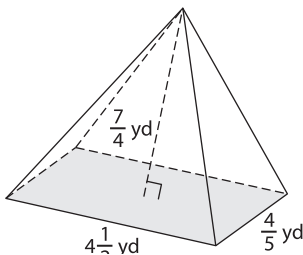
A) Find the volume of each rectangular pyramid.

1)

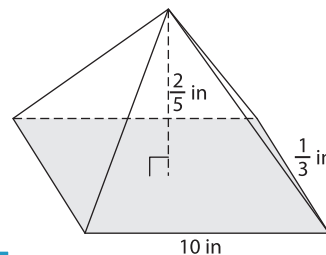


Volume = \_\_\_\_\_

2)



3)



Volume = \_\_\_\_\_

B) Find the volume of each

4) height =  $\frac{1}{6}$  in ; width = 1

Volume = \_\_\_\_\_

6) length = 8 yd ; height =  $\frac{5}{3}$

Volume = \_\_\_\_\_

**PREVIEW**

Gain complete access to the largest collection of worksheets in all subjects!

Members, please log in to download this worksheet.

Not a member? Please sign up to gain complete access.

[www.mathworksheets4kids.com](http://www.mathworksheets4kids.com)

5.

length =  $2\frac{5}{8}$  ft ; height =  $\frac{8}{7}$  ft

Volume = \_\_\_\_\_

length =  $\frac{1}{5}$  in ; height =  $\frac{25}{4}$  in

Volume = \_\_\_\_\_

8) Find the volume of a rectangular pyramid whose length, width and height are  $1\frac{1}{5}$  feet,  $\frac{7}{9}$  foot and  $2\frac{1}{4}$  feet respectively.

\_\_\_\_\_