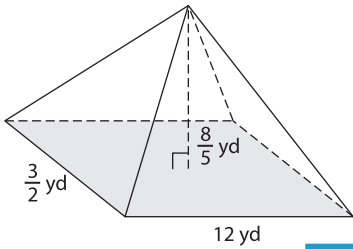


Name : _____

Volume - Rectangular Pyramid

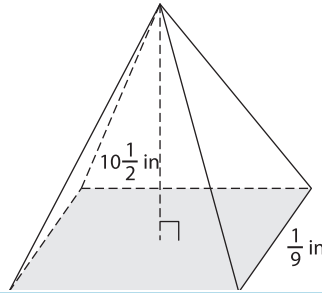
A) Find the volume of each rectangular pyramid.

1)



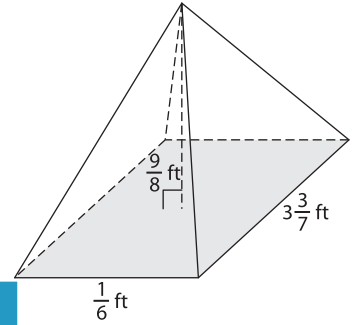
Volume = _____

2)



Volume = _____

3)



Volume = _____

B) Find the volume of each

4) length = $\frac{15}{7}$ ft ; height = 2

Volume = _____

6) width = $\frac{5}{12}$ in ; length = $\frac{6}{7}$

Volume = _____

PREVIEW

Gain complete access to the largest collection of worksheets in all subjects!

Members, please log in to download this worksheet.

Not a member? Please sign up to gain complete access.

www.mathworksheets4kids.com

5.

height = $\frac{7}{3}$ yd ; length = 7 yd

Volume = _____

height = $1\frac{3}{4}$ ft ; width = $\frac{3}{4}$ ft

Volume = _____

8) The length, width and height of a rectangular pyramid are $\frac{5}{2}$ yards, $\frac{1}{2}$ yard and $4\frac{1}{2}$ yards respectively. What is the volume of the pyramid?
