

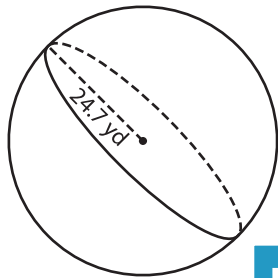
Name : _____

Volume - Spheres

Decimals: ES3

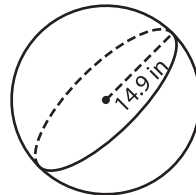
A) Find the volume of each sphere. Round your answer to two decimal places.
(use $\pi = 3.14$)

1)



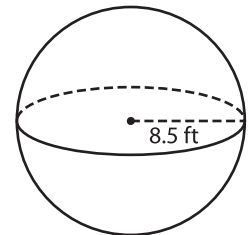
Volume = _____

2)



Volume = _____

3)



B) Find the volume of a sphere with a radius of 18.6 yd. Round your answer to two decimal places.

4) radius = 18.6 yd

Volume = _____

Gain complete access to the largest collection of worksheets in all subjects!

Members, please log in to download this worksheet.

Not a member? Please sign up to gain complete access.

www.mathworksheets4kids.com

6) radius = 4.1 ft

Volume = _____

Volume = _____

8) Find the volume of a sphere whose radius is 28.3 inches. Round your answer to two decimal places. (use $\pi = 3.14$)
