

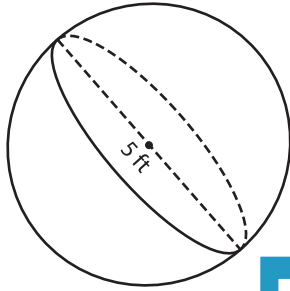
Name : \_\_\_\_\_

# Volume - Spheres

Integers: MS1

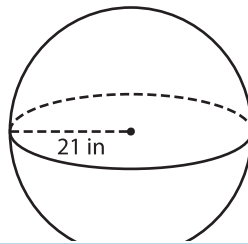
A) Find the volume of each sphere. Round your answer to two decimal places. (use  $\pi = 3.14$ )

1)



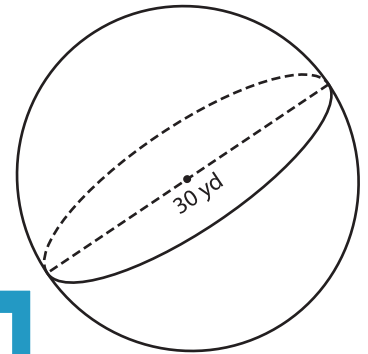
Volume = \_\_\_\_\_

2)



Volume = \_\_\_\_\_

3)



B) Find the volume of each sphere. Round your answer to two decimal places.

4) radius = 10 in

Volume = \_\_\_\_\_

6) diameter = 28 yd

Volume = \_\_\_\_\_

**PREVIEW**

Gain complete access to the largest collection of worksheets in all subjects!

Members, please log in to download this worksheet.

Not a member? Please sign up to gain complete access.

[www.mathworksheets4kids.com](http://www.mathworksheets4kids.com)

Volume = \_\_\_\_\_

8) Find the volume of a sphere whose radius is 13 feet. Round your answer to two decimal places. (use  $\pi = 3.14$ )

\_\_\_\_\_