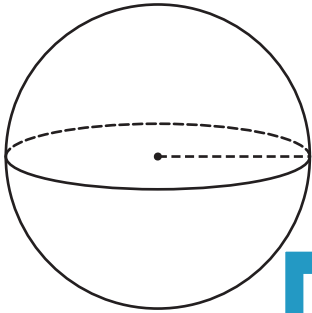


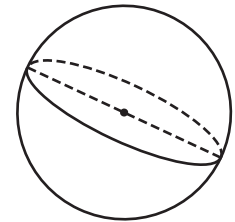
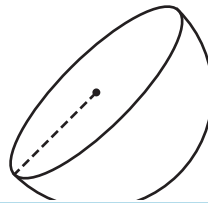
Volume - Sphere and Hemisphere

A) Find the indicated measure. Round your answer to the nearest tenth.

- 1) Volume = $14,197.33\pi$ yd³ 2) Volume = $3,275.33\pi$ in³ 3) Volume = 85.33π ft³



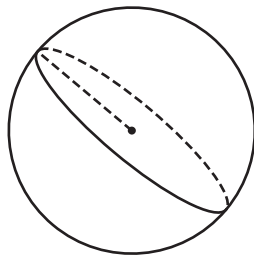
diameter = _____



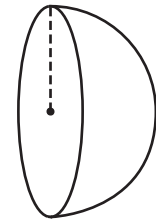
diameter = _____

- 4) Volume = $9,145.33\pi$

Volume = 666.67π in³



radius = _____



radius = _____

- 7) Find the radius of a sphere with a volume of $3,275.33\pi$ in³. Round your answer to the nearest tenth.

Find the radius of a hemisphere with a volume of 83.33π in³. Round your answer to the nearest tenth.

PREVIEW

Gain complete access to the largest collection of worksheets in all subjects!

Members, please
log in to
download this
worksheet.

Not a member?
Please sign up to
gain complete
access.

www.mathworksheets4kids.com

- 8) The volume of a hemisphere is 83.33π cubic inches. Determine the radius of the hemisphere. Round your answer to the nearest tenth.