

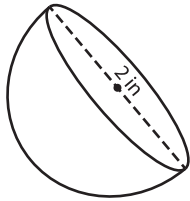
Name : _____

Volume - Sphere and Hemisphere

Integers: S1

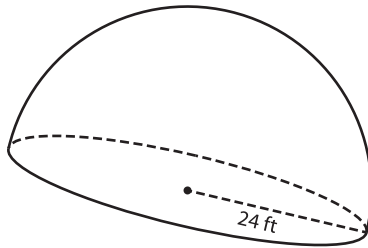
A) Find the volume of each sphere and hemisphere. Round your answer to two decimal places. (use $\pi = 3.14$)

1)



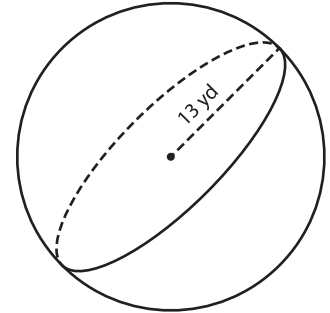
Volume = _____

2)



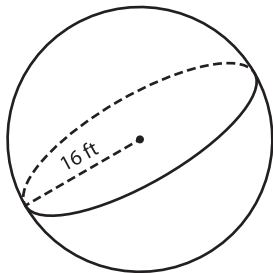
Volume = _____

3)



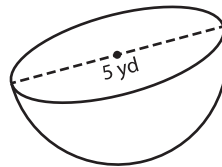
Volume = _____

4)



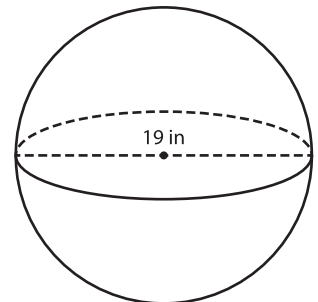
Volume = _____

5)



Volume = _____

6)



Volume = _____

7) Determine the volume of a hemisphere whose radius is 21 inches. (use $\pi = 3.14$)

8) The diameter of a sphere is 8 feet. Find the volume of the sphere. Round your answer to two decimal places. (use $\pi = 3.14$)
