

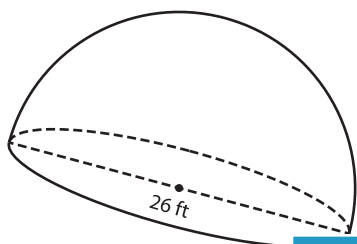
Name : \_\_\_\_\_

## Volume - Sphere and Hemisphere

Integers: S2

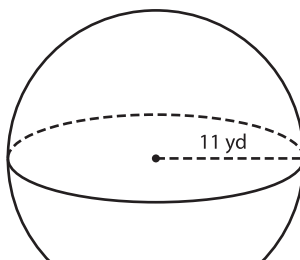
A) Find the volume of each sphere and hemisphere. Round your answer to two decimal places. (use  $\pi = 3.14$ )

1)



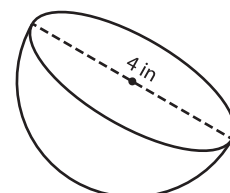
Volume = \_\_\_\_\_

2)

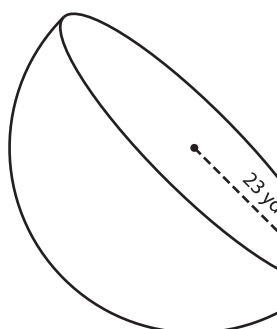


Volume = \_\_\_\_\_

3)



4)




Volume = \_\_\_\_\_

Gain complete access to the largest collection of worksheets in all subjects!

Members, please log in to download this worksheet.

Not a member? Please sign up to gain complete access.

[www.mathworksheets4kids.com](http://www.mathworksheets4kids.com)



Volume = \_\_\_\_\_

7) The radius of a sphere is 10 yards. Find the volume of the sphere to two decimal places.

Volume = \_\_\_\_\_

8) Find the volume of a hemisphere whose diameter is 10 yards. Round your answer to two decimal places. (use  $\pi = 3.14$ )