

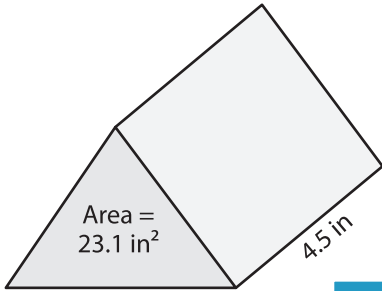
Name : _____

Volume - Triangular Prism

Decimals: S1

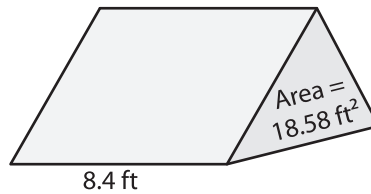
Find the volume of each triangular prism. Round your answer to two decimal places.

1)

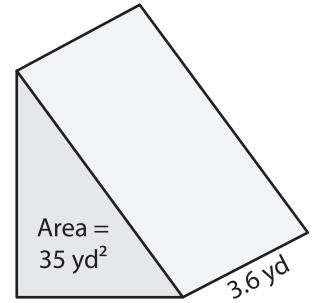


Volume = _____

2)

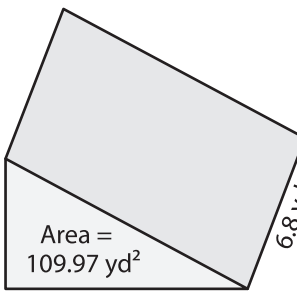


3)



Volume = _____

4)



Volume = _____

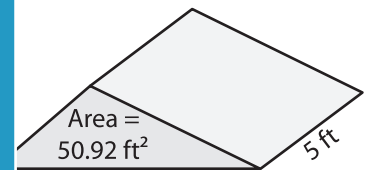
PREVIEW

Gain complete access to the largest collection of worksheets in all subjects!

Members, please log in to download this worksheet.

Not a member? Please sign up to gain complete access.

www.mathworksheets4kids.com



Volume = _____

7) Find the volume of the triangular prism. Round your answer to two decimal places.

and a height of 4.3 yards.

8) The base area of a triangular prism is 65.64 square inches. Determine the volume if its length is 5.9 inches. Round your answer to two decimal places.
