

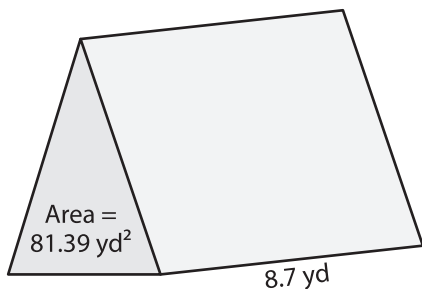
Name : \_\_\_\_\_

Decimals: S2

## Volume - Triangular Prism

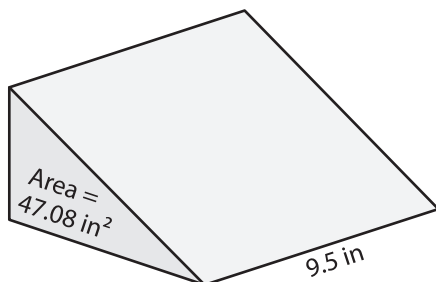
Find the volume of each triangular prism. Round your answer to two decimal places.

1)

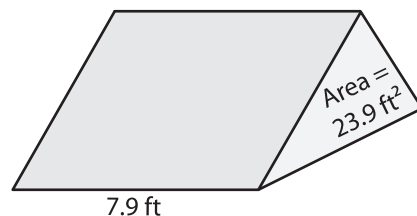


Volume = \_\_\_\_\_

2)

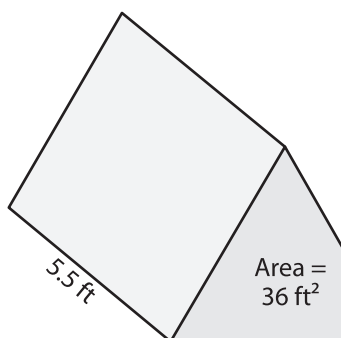


3)



Volume = \_\_\_\_\_

4)



Volume = \_\_\_\_\_

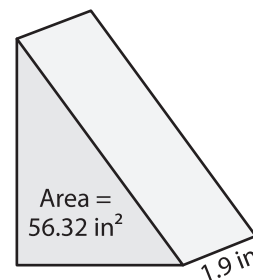
**PREVIEW**

Gain complete access to the largest collection of worksheets in all subjects!

Members, please log in to download this worksheet.

Not a member? Please sign up to gain complete access.

[www.mathworksheets4kids.com](http://www.mathworksheets4kids.com)



Volume = \_\_\_\_\_

7) The base area of a triangular prism is 12.5 square feet and its

length is 2 inches.

\_\_\_\_\_

8) A triangular prism has a height of 1.7 feet and a base with area of 105.91 square feet. What is its volume? Round your answer to two decimal places.

\_\_\_\_\_