

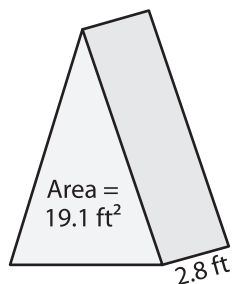
Name : \_\_\_\_\_

## Volume - Triangular Prism

Decimals: S3

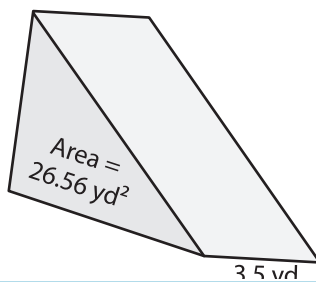
Find the volume of each triangular prism. Round your answer to two decimal places.

1)

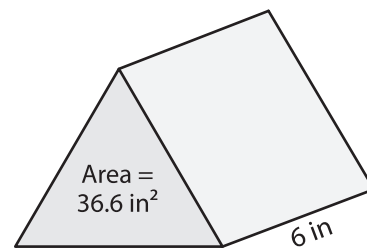


Volume = \_\_\_\_\_

2)

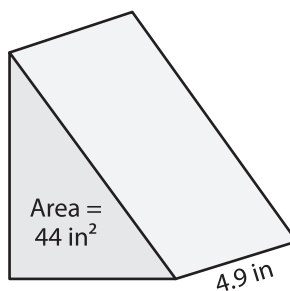


3)



Volume = \_\_\_\_\_

4)



Volume = \_\_\_\_\_

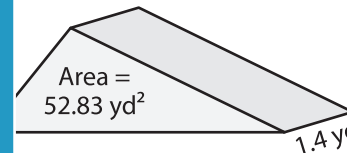
**PREVIEW**

Gain complete access to the largest collection of worksheets in all subjects!

Members, please log in to download this worksheet.

Not a member? Please sign up to gain complete access.

[www.mathworksheets4kids.com](http://www.mathworksheets4kids.com)



Volume = \_\_\_\_\_

7) The height of a triangular

what is its volume?

8) Determine the volume of the triangular prism with a base area of  $62.63$  square yards and a height of  $2.5$  yards. Round your answer to two decimal places.