

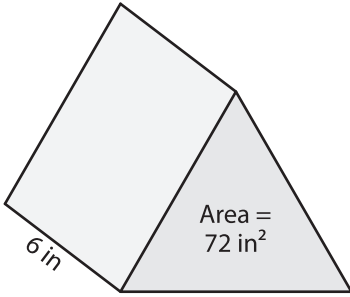
Name : _____

Volume - Triangular Prism

Integers: S1

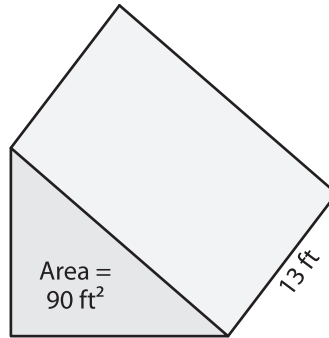
Find the volume of each triangular prism.

1)



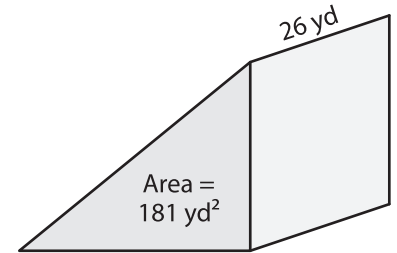
Volume = _____

2)



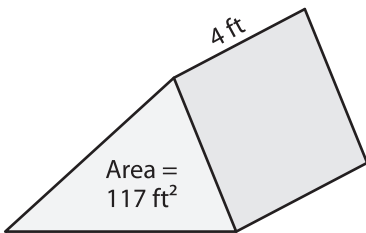
Volume = _____

3)



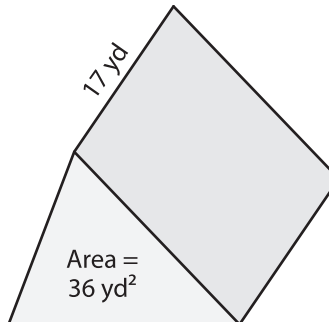
Volume = _____

4)



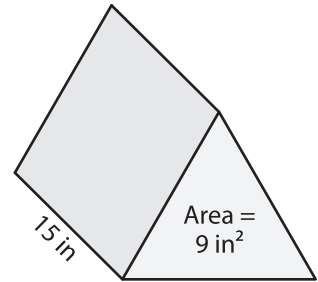
Volume = _____

5)



Volume = _____

6)



Volume = _____

7) The base area of a triangular prism is 55 square feet. Find the volume if its length is 20 feet.

8) A triangular prism has a height of 16 yards and a base with area of 169 square yards. What is its volume?
