

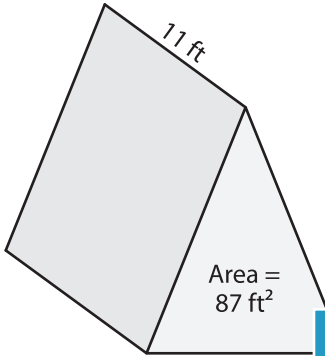
Name : \_\_\_\_\_

## Volume - Triangular Prism

Integers: S2

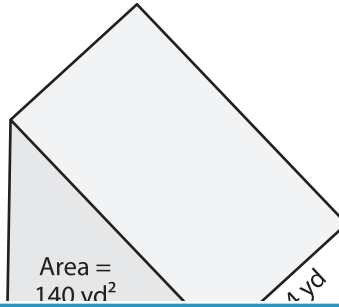
Find the volume of each triangular prism.

1)

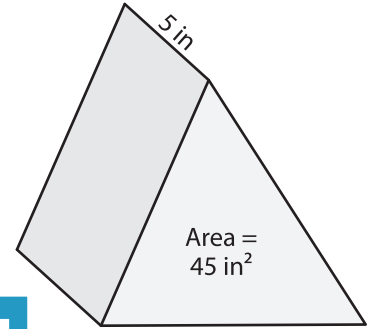


Volume = \_\_\_\_\_

2)

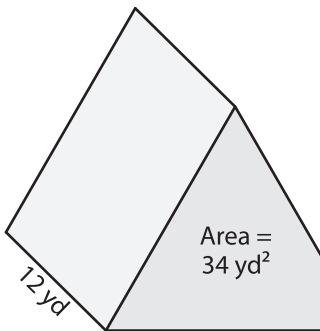


3)



Volume = \_\_\_\_\_

4)



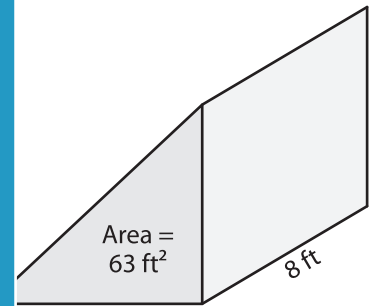
Volume = \_\_\_\_\_

**PREVIEW**  
Gain complete access to the largest collection of worksheets in all subjects!

Members, please log in to download this worksheet.

Not a member? Please sign up to gain complete access.

[www.mathworksheets4kids.com](http://www.mathworksheets4kids.com)



Volume = \_\_\_\_\_

7) The height of a triangular

is, what is its volume?

\_\_\_\_\_

8) Determine the volume of the triangular prism with a base area of 29 square inches and a height of 25 inches.

\_\_\_\_\_