

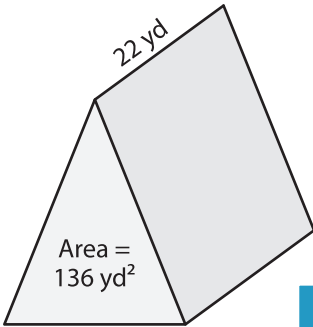
Name : \_\_\_\_\_

Integers: S3

## Volume - Triangular Prism

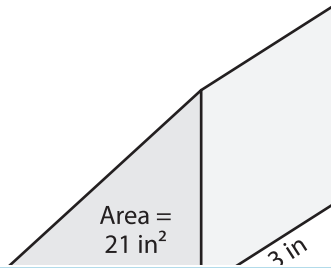
Find the volume of each triangular prism.

1)

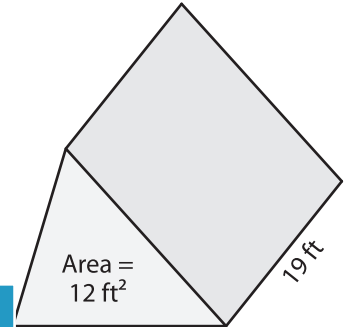


Volume = \_\_\_\_\_

2)

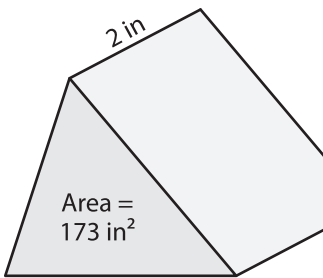


3)



Volume = \_\_\_\_\_

4)



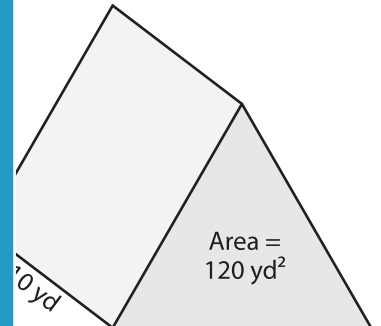
Volume = \_\_\_\_\_

**PREVIEW**  
Gain complete access to the largest collection of worksheets in all subjects!

Members, please log in to download this worksheet.

Not a member? Please sign up to gain complete access.

[www.mathworksheets4kids.com](http://www.mathworksheets4kids.com)



Volume = \_\_\_\_\_

7) Find the volume of the triangular prism with a base area of 150 square feet and a height of 27 inches.

\_\_\_\_\_

8) The base area of a triangular prism is 98 square feet. Determine the volume if its length is 9 feet.

\_\_\_\_\_