

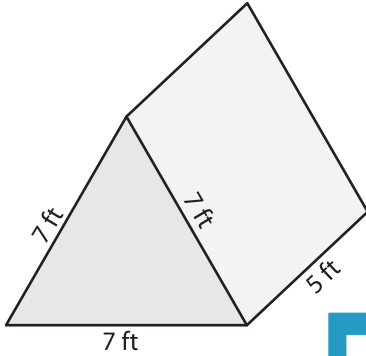
Name : _____

Volume - Triangular Prism

Sheet 1

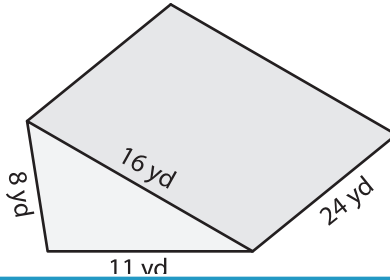
Find the volume of each triangular prism. Round your answer to two decimal places.

1)



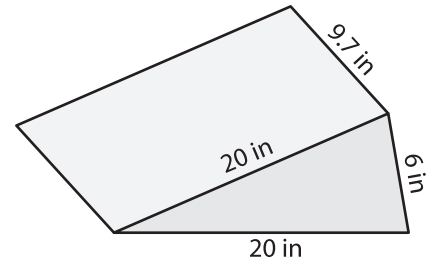
Volume = _____

2)

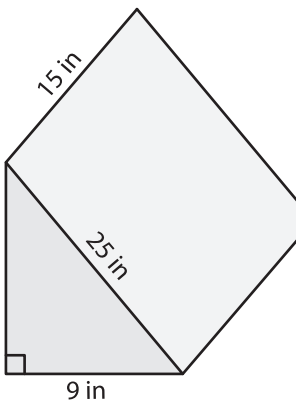


Volume = _____

3)



4)



Volume = _____

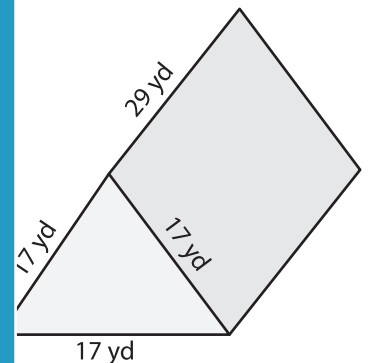
PREVIEW

Gain complete access to the largest collection of worksheets in all subjects!

Members, please log in to download this worksheet.

Not a member? Please sign up to gain complete access.

www.mathworksheets4kids.com



Volume = _____

7) The base of a prism is an equilateral triangle with a side length of 10 inches and a height of 22 inches. Round your answer to two decimal places.

Determine the volume if its length is 15 inches.

8) The base of a prism is an isosceles triangle whose sides measure 8 feet, 8 feet and 13 feet. Find the volume if its height is 21 feet. Round your answer to two decimal places.
