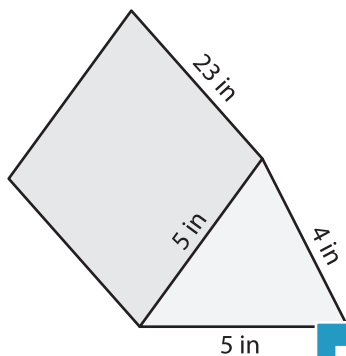


Name : \_\_\_\_\_

## Volume - Triangular Prism

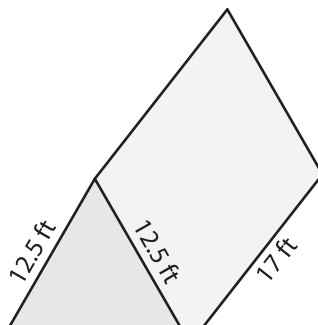
Find the volume of each triangular prism. Round your answer to two decimal places.

1)

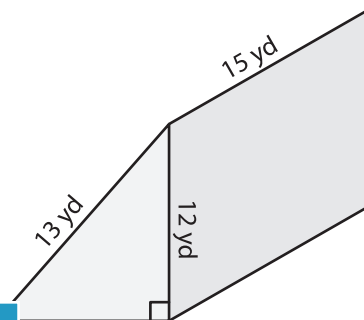


Volume = \_\_\_\_\_

2)

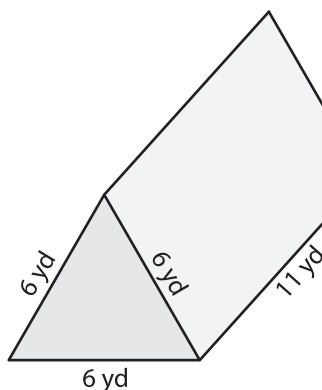


3)



Volume = \_\_\_\_\_

4)



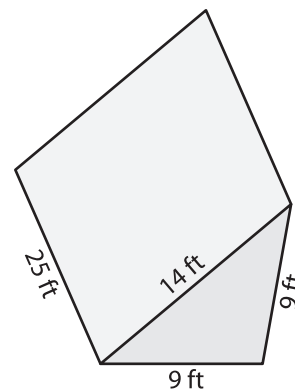
Volume = \_\_\_\_\_

**PREVIEW**  
Gain complete access to the largest collection of worksheets in all subjects!

Members, please log in to download this worksheet.

Not a member? Please sign up to gain complete access.

[www.mathworksheets4kids.com](http://www.mathworksheets4kids.com)



Volume = \_\_\_\_\_

7) The base of a prism is an isosceles triangle with two equal sides of 19 yards. If the length of the prism is 4.1 yards, 14.1 yards and 19.1 yards, find the volume of the prism. Round your answer to two decimal places.

\_\_\_\_\_

8) The height of a triangular prism is 5 inches. If the sides of the triangle measure 4 inches, 5 inches and 6 inches, find the volume of the triangular prism. Round your answer to two decimal places.

\_\_\_\_\_