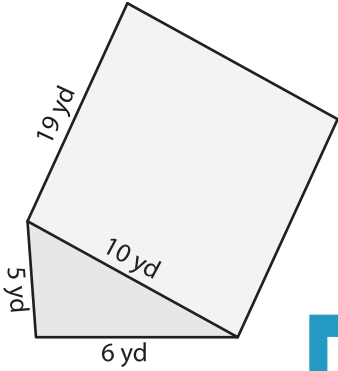


Name : \_\_\_\_\_

## Volume - Triangular Prism

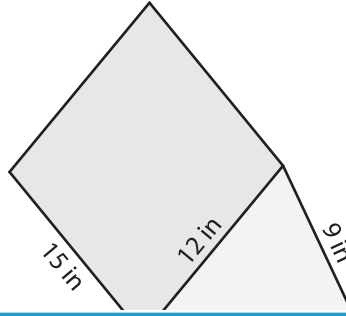
Find the volume of each triangular prism. Round your answer to two decimal places.

1)

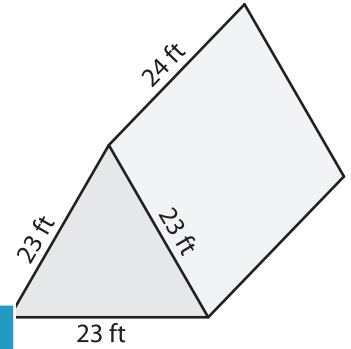


Volume = \_\_\_\_\_

2)

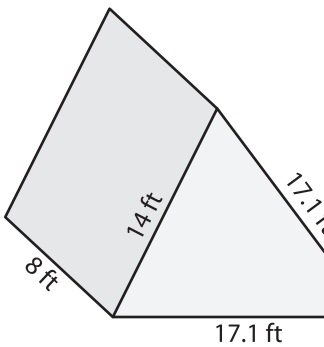


3)



Volume = \_\_\_\_\_

4)



Volume = \_\_\_\_\_

7) The height of a triangular prism is 15 feet, 13 feet and 19.4 feet, respectively. Find the volume of the prism for each height.

\_\_\_\_\_

8) The base of a prism is an equilateral triangle whose side measures 13 yards. Determine the volume if its height is 26 yards. Round your answer to two decimal places.

\_\_\_\_\_

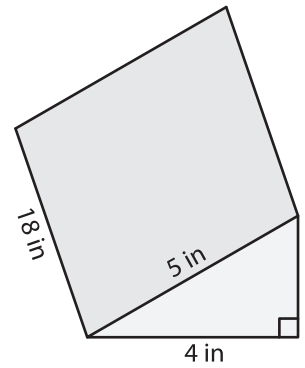
**PREVIEW**

Gain complete access to the largest collection of worksheets in all subjects!

Members, please log in to download this worksheet.

Not a member? Please sign up to gain complete access.

[www.mathworksheets4kids.com](http://www.mathworksheets4kids.com)



Volume = \_\_\_\_\_

15 feet, 13 feet and 19.4 feet, respectively. Find the volume of the prism for each height.