

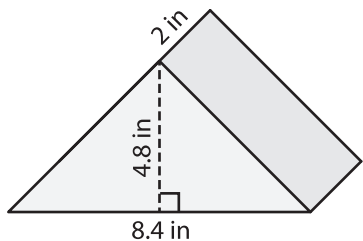
Name : _____

Volume - Triangular Prism

Decimals: S1

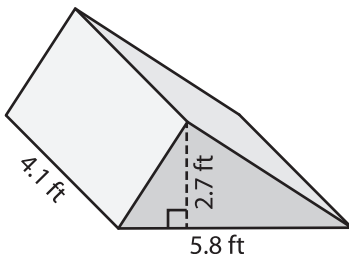
Find the volume of each triangular prism. Round your answer to two decimal places.

1)



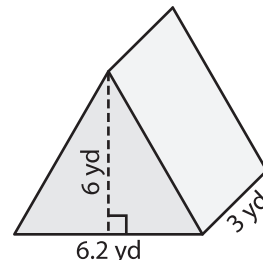
Volume = _____

2)



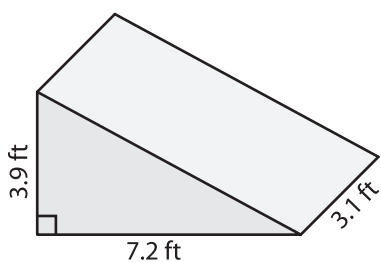
Volume = _____

3)



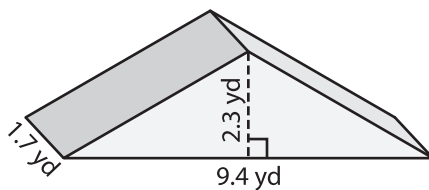
Volume = _____

4)



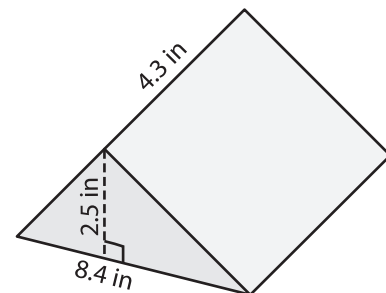
Volume = _____

5)



Volume = _____

6)



Volume = _____

7) The base of a prism is a triangle with a base of 7.1 feet and a height of 4 feet. Determine the volume if its length is 6.9 feet.

8) The base of a prism is a triangle whose base is 1.8 yards and height is 3.2 yards. Find the volume if its length is 9.5 yards.
