

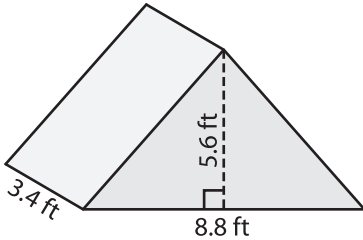
Name : _____

Volume - Triangular Prism

Decimals: S2

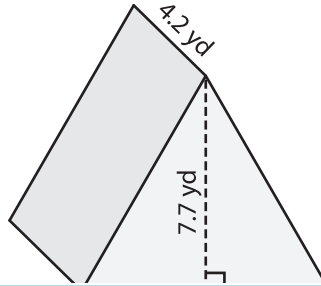
Find the volume of each triangular prism. Round your answer to two decimal places.

1)

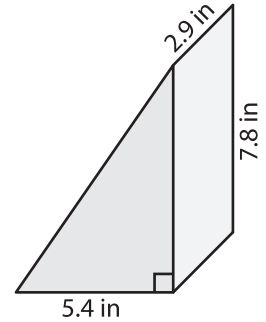


Volume = _____

2)

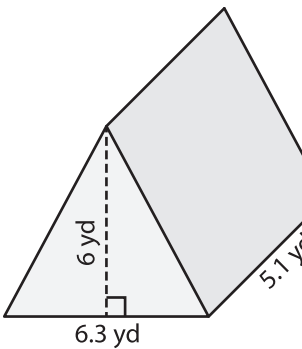


3)



Volume = _____

4)



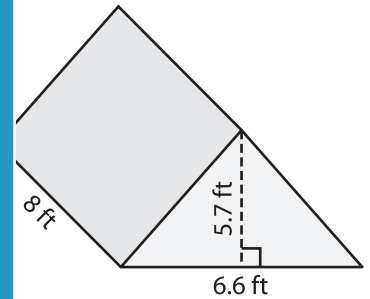
Volume = _____

PREVIEW
Gain complete access to the largest collection of worksheets in all subjects!

Members, please log in to download this worksheet.

Not a member? Please sign up to gain complete access.

www.mathworksheets4kids.com



Volume = _____

7) The base of a prism is a triangle with a base length of 2.2 yards. Round

its volume. Find the volume if its

8) The base of a prism is a right triangle with legs measuring 5.2 inches and 7.4 inches. If the height of the prism is 1.5 inches, determine its volume.
