

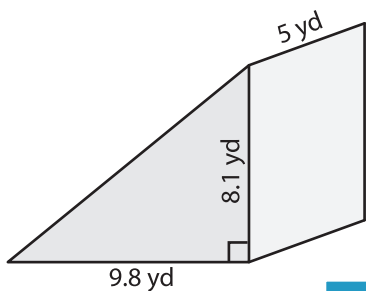
Name : _____

Decimals: S3

Volume - Triangular Prism

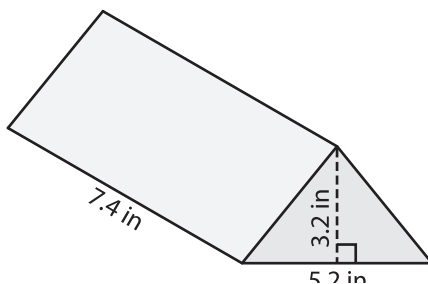
Find the volume of each triangular prism. Round your answer to two decimal places.

1)

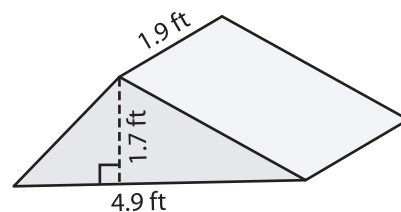


Volume = _____

2)

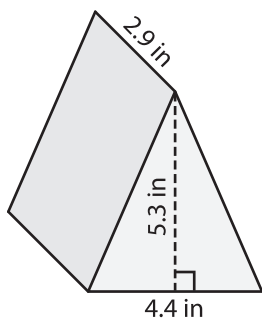


3)



Volume = _____

4)



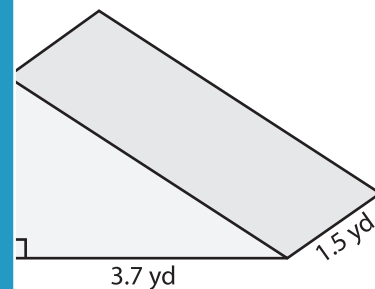
Volume = _____

PREVIEW
Gain complete access to the largest collection of worksheets in all subjects!

Members, please log in to download this worksheet.

Not a member? Please sign up to gain complete access.

www.mathworksheets4kids.com



Volume = _____

7) The base of a prism is a right triangle with a base of 8.2 inches, find its volume.

_____ inches. If the height of the

8) The base of a prism is a triangle with a base of 5.1 feet and a height of 4 feet. Determine the volume if its length is 7 feet.