

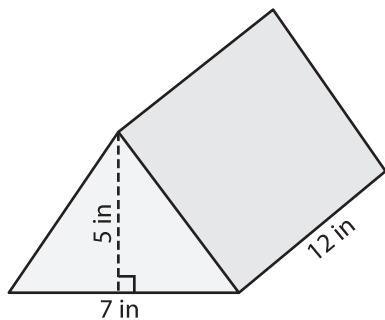
Name : _____

Volume - Triangular Prism

ES1

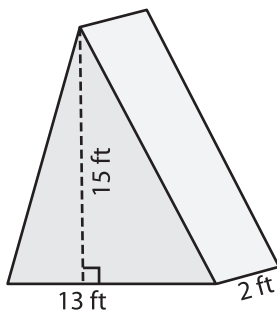
Find the volume of each triangular prism.

1)



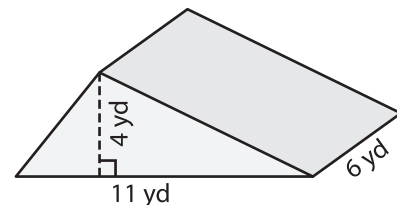
Volume = _____

2)



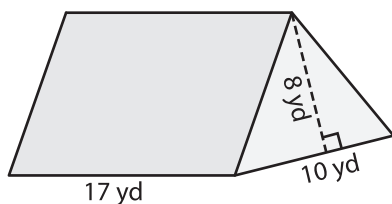
Volume = _____

3)



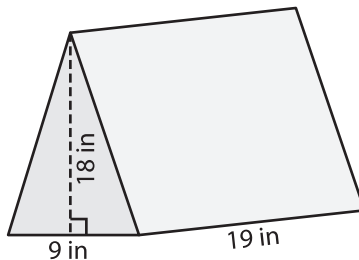
Volume = _____

4)



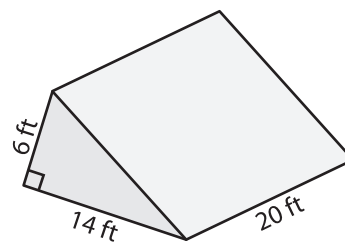
Volume = _____

5)



Volume = _____

6)



Volume = _____

7) The base of a prism is a right triangle with legs measuring 16 feet and 4 feet. If the height of the prism is 14 feet, find its volume.

8) The base of a prism is a triangle with a base of 9 inches and a height of 5 inches. Determine the volume if its length is 18 inches.
