

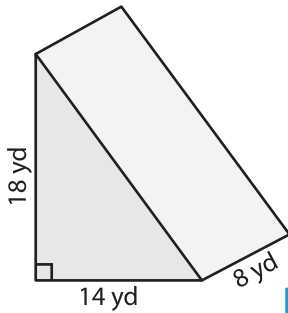
Name : \_\_\_\_\_

## Volume - Triangular Prism

ES2

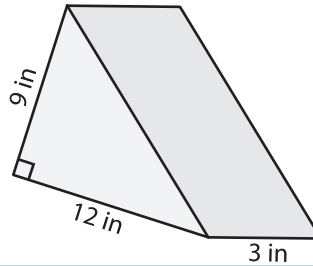
Find the volume of each triangular prism.

1)

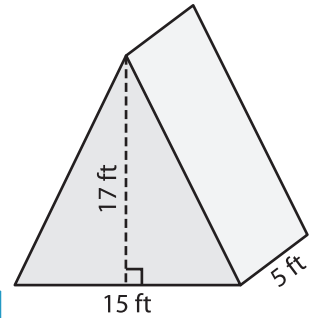


Volume = \_\_\_\_\_

2)

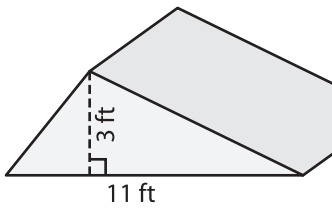


3)



Volume = \_\_\_\_\_

4)



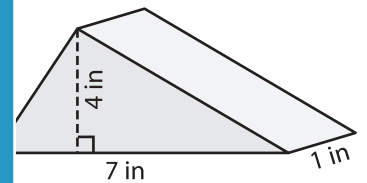
Volume = \_\_\_\_\_

**PREVIEW**  
Gain complete access to the largest collection of worksheets in all subjects!

Members, please log in to download this worksheet.

Not a member? Please sign up to gain complete access.

[www.mathworksheets4kids.com](http://www.mathworksheets4kids.com)



Volume = \_\_\_\_\_

7) The base of a prism is a triangle whose base is 10 yards and height is 12 yards. Determine the volume if its length is 10 yards.

8) The base of a prism is a triangle whose base is 9 feet and height is 16 feet. Find the volume if its length is 15 feet.

\_\_\_\_\_

8) The base of a prism is a triangle whose base is 9 feet and height is 16 feet. Find the volume if its length is 15 feet.

\_\_\_\_\_