

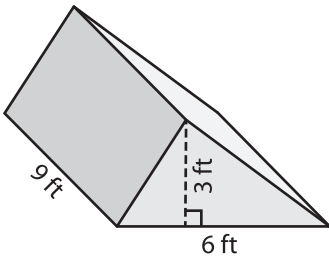
Name : _____

Volume - Triangular Prism

ES3

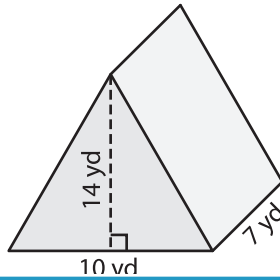
Find the volume of each triangular prism.

1)

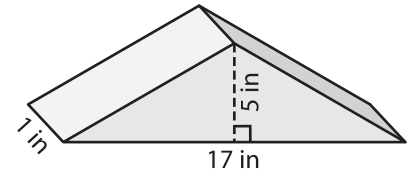


Volume = _____

2)

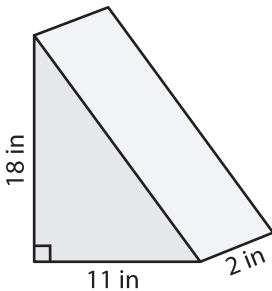


3)



Volume = _____

4)



Volume = _____

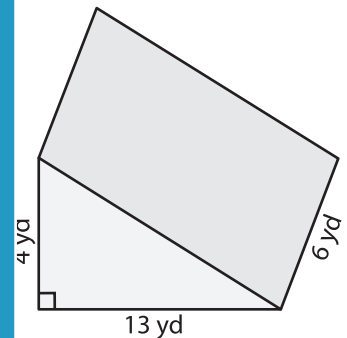
PREVIEW

Gain complete access to the largest collection of worksheets in all subjects!

Members, please log in to download this worksheet.

Not a member? Please sign up to gain complete access.

www.mathworksheets4kids.com



Volume = _____

7) The base of a prism is a right triangle with a hypotenuse length of 15 inches.

Find the volume if its

8) The base of a prism is a right triangle with legs measuring 7 yards and 20 yards. If the height of the prism is 16 yards, determine its volume.
