

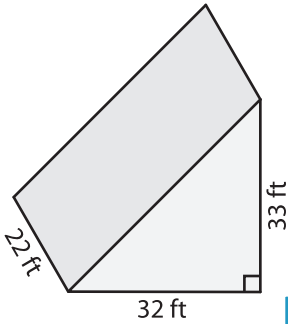
Name : \_\_\_\_\_

## Volume - Triangular Prism

MS1

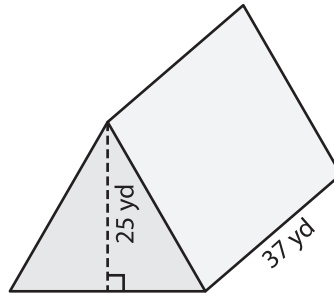
Find the volume of each triangular prism.

1)

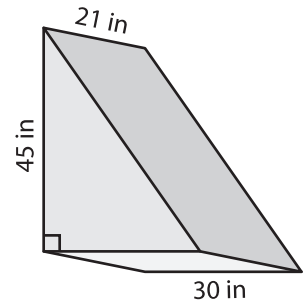


Volume = \_\_\_\_\_

2)

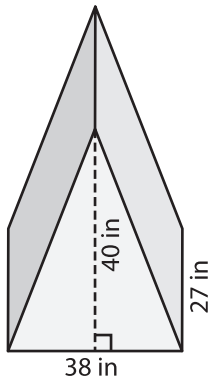


3)



Volume = \_\_\_\_\_

4)



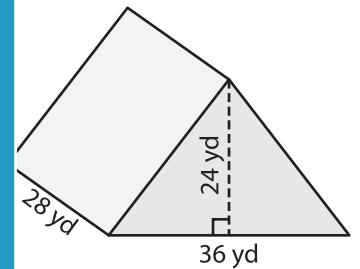
Volume = \_\_\_\_\_

**PREVIEW**  
Gain complete access to the largest collection of worksheets in all subjects!

Members, please log in to download this worksheet.

Not a member? Please sign up to gain complete access.

[www.mathworksheets4kids.com](http://www.mathworksheets4kids.com)



Volume = \_\_\_\_\_

7) The base of a prism is a triangle with a base length is 26 yards.

Find the volume if its

\_\_\_\_\_

8) The base of a prism is a right triangle with legs measuring 31 inches and 23 inches. If the height of the prism is 72 inches, determine its volume.

\_\_\_\_\_