

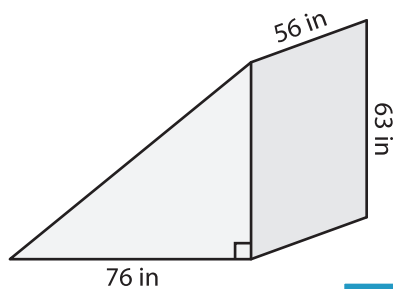
Name : _____

Volume - Triangular Prism

MS3

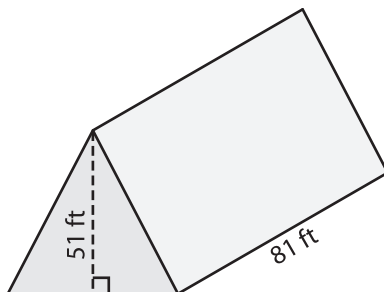
Find the volume of each triangular prism.

1)



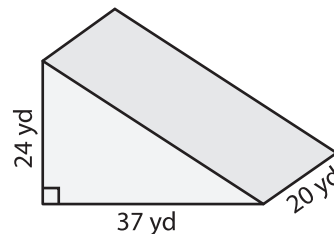
Volume = _____

2)

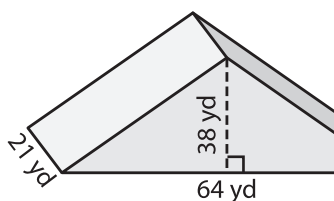


Volume = _____

3)



4)



Volume = _____

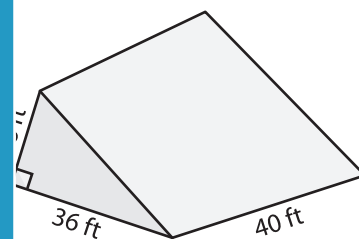
PREVIEW

Gain complete access to the largest collection of worksheets in all subjects!

Members, please log in to download this worksheet.

Not a member? Please sign up to gain complete access.

www.mathworksheets4kids.com



Volume = _____

7) The base of a prism is a triangle whose base is 67 inches and height is 25 inches. Determine the volume.

_____ inches. Determine the volume

8) The base of a prism is a triangle whose base is 58 feet and height is 25 feet. Find the volume if its length is 84 feet.