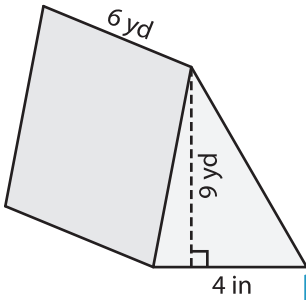


Name : _____

Volume - Triangular Prism

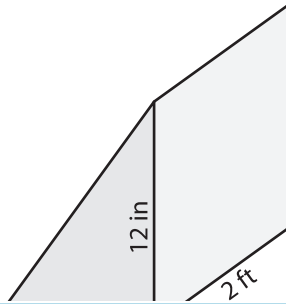
Find the volume of each triangular prism. Round your answer to two decimal places.

1)

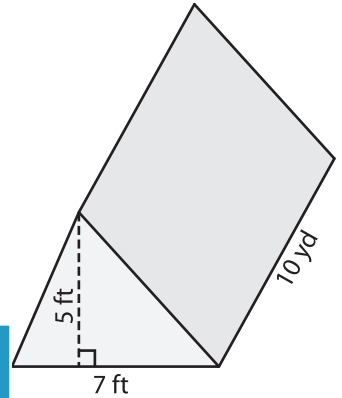


Volume = _____

2)

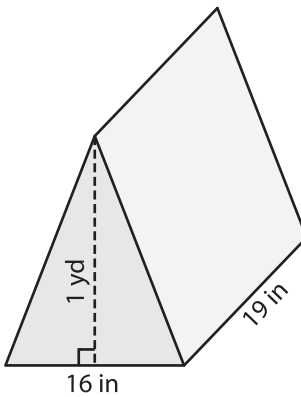


3)



Volume = _____ ft³

4)



Volume = _____

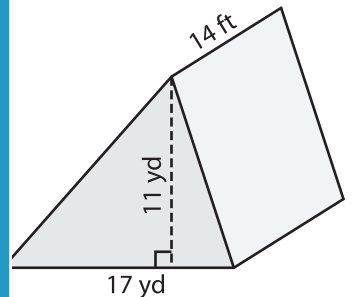
PREVIEW

Gain complete access to the largest collection of worksheets in all subjects!

Members, please log in to download this worksheet.

Not a member? Please sign up to gain complete access.

www.mathworksheets4kids.com



Volume = _____ yd³

7) The base of a prism is a right triangle with a base of 20 yards, find its volume

yards. If the height of the prism

8) The base of a prism is a triangle with a base of 13 inches and a height of 25 inches. Determine the volume in cubic inches if its length is 3 feet.
