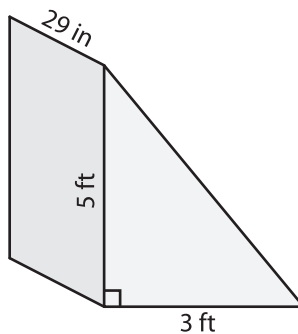


Name : \_\_\_\_\_

# Volume - Triangular Prism

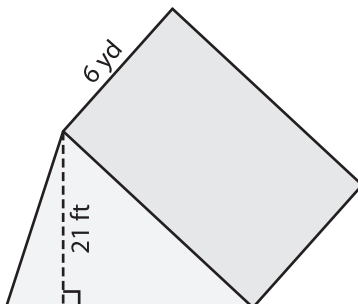
Find the volume of each triangular prism. Round your answer to two decimal places.

1)

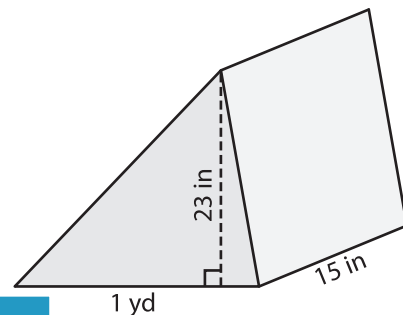


Volume = \_\_\_\_\_

2)

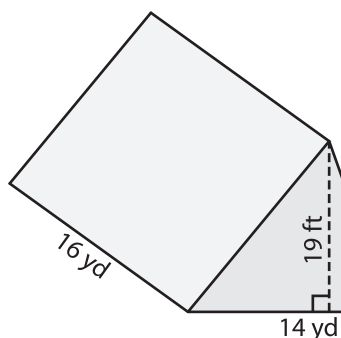


3)



Volume = \_\_\_\_\_ in<sup>3</sup>

4)



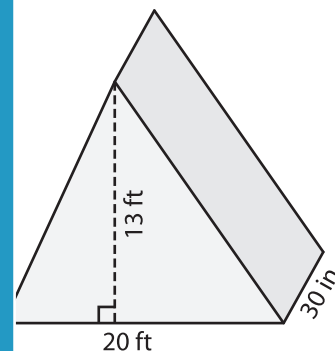
Volume = \_\_\_\_\_

Gain complete access to the largest collection of worksheets in all subjects!

Members, please log in to download this worksheet.

Not a member? Please sign up to gain complete access.

[www.mathworksheets4kids.com](http://www.mathworksheets4kids.com)



Volume = \_\_\_\_\_ ft<sup>3</sup>

7) The base of a prism is a right triangle with a hypotenuse of 10 feet. Round your answer to two decimal places.

\_\_\_\_\_

Find the volume in cubic feet

8) The base of a prism is a right triangle with legs measuring 27 feet and 11 yards. If the height of the prism is 8 yards, determine its volume in cubic yards.

\_\_\_\_\_