

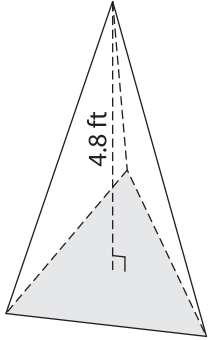
Name : _____

Volume - Triangular Pyramid

Decimals: S1

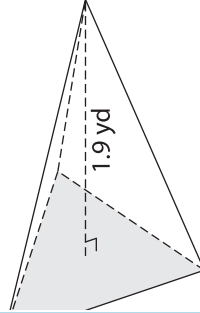
Find the volume of each triangular pyramid. Round your answer to two decimal places.

1) Base Area = 57.5 ft^2

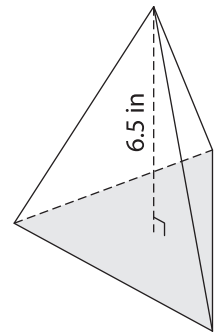


Volume = _____

2) Base Area = 14.86 yd^2

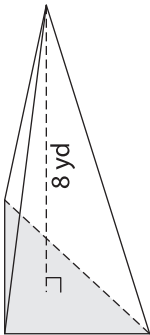


3) Base Area = 36.3 in^2



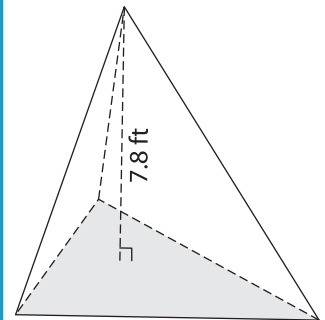
Volume = _____

4) Base Area = 62.64 yd^2



Volume = _____

Base Area = 77.21 ft^2



Volume = _____

7) Find the volume of a trian

and a height of 9.6 feet.

PREVIEW

Gain complete access to the largest collection of worksheets in all subjects!

Members, please log in to download this worksheet.

Not a member? Please sign up to gain complete access.

www.mathworksheets4kids.com

8) The height of a triangular pyramid is 5.7 yards. Determine the volume, if its base area is 82.58 square yards. Round your answer to two decimal places.
