

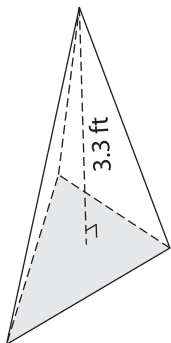
Name : \_\_\_\_\_

## Volume - Triangular Pyramid

Decimals: S3

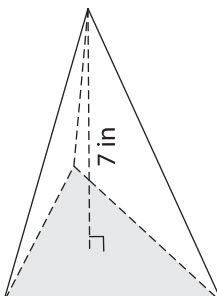
Find the volume of each triangular pyramid. Round your answer to two decimal places.

1) Base Area =  $46.12 \text{ ft}^2$



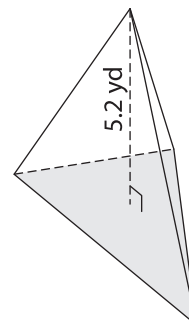
Volume = \_\_\_\_\_

2) Base Area =  $88.43 \text{ in}^2$

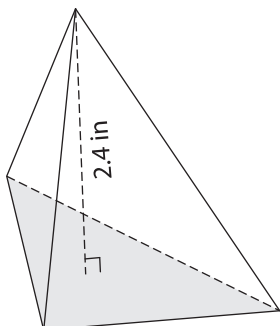


Volume = \_\_\_\_\_

3) Base Area =  $18.9 \text{ yd}^2$

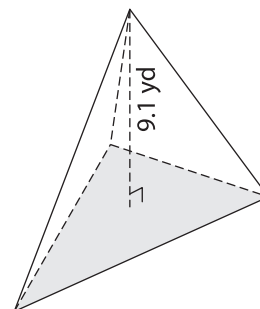


4) Base Area =  $27.5 \text{ in}^2$



Volume = \_\_\_\_\_

Base Area =  $51 \text{ yd}^2$



Volume = \_\_\_\_\_

7) The height of a triangular pyramid is 4.5 yd and its base area is  $12.5 \text{ yd}^2$ . Find its volume.

find its volume.

**PREVIEW**

Gain complete access to the largest collection of worksheets in all subjects!

Members, please log in to download this worksheet.

Not a member? Please sign up to gain complete access.

[www.mathworksheets4kids.com](http://www.mathworksheets4kids.com)

8) A triangular pyramid has a base area of  $66.18$  square yards and a height of  $4$  yards. Round your answer to two decimal places.