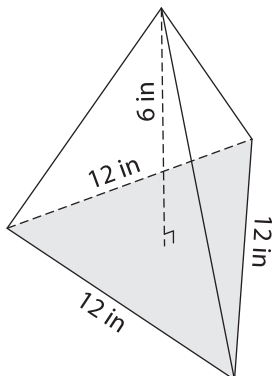


Volume - Triangular Pyramid

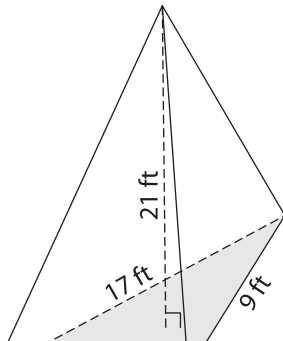
Find the volume of each triangular pyramid. Round your answer to two decimal places.

1)

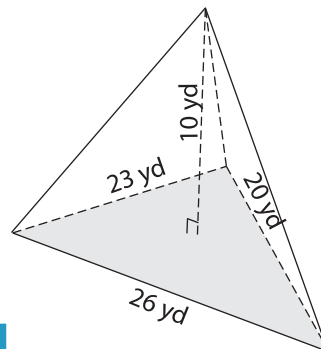


Volume = _____

2)

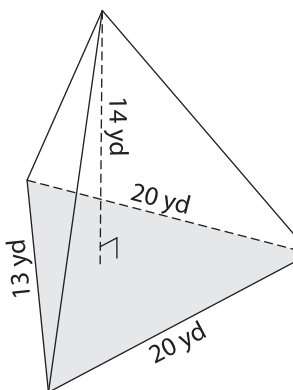


3)

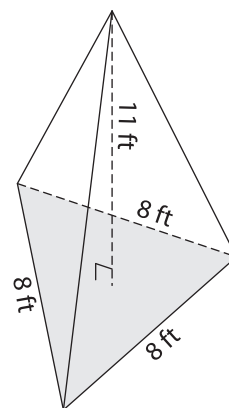


Volume = _____

4)



Volume = _____



Volume = _____

7) The base of a pyramid is a right-angled triangle with legs of 19 inches and 25 inches. If the height of the pyramid is 30 inches, determine the volume. Round your answer to two decimal places.

8) The base of a pyramid is a triangle whose sides measure 9 feet, 8 feet and 15 feet. Determine the volume, if the height of the pyramid is 21 feet. Round your answer to two decimal places.

PREVIEW

Gain complete access to the largest collection of worksheets in all subjects!

Members, please log in to download this worksheet.

Not a member? Please sign up to gain complete access.

www.mathworksheets4kids.com